

TODAY

is the day to
learn something
NEW

Welcome to Wednesday 24th March 2021 Year 5 Home Learning


Task 1 - Reading Plus - 30 minutes

Task 2 - Literacy - You have some direct speech games to play on Classroom Secrets, so I that can check that you fully understand how to accurately use speech!

THEN

Look at my example of a dialogue between the Highwayman, Bess and Tim. Some of my speech punctuation is missing...

Can you rewrite the dialogue using the correct punctuation and improve by exchanging the word 'said' for an alternative verb. There is a word bank to help you...



Inverted Commas

Beginning and End
Keep your inverted commas at the beginning and the end of the words being spoken.
"Stop!" I said.


New Speaker, New Line
Start a new line whenever someone new speaks.
"How are you doing today?" asked Henry.
"I'm great!" said Ashton.

Capital Letter
Begin what is spoken with a capital letter!
"What an amazing day!" he announced.

Commas
Remember to add commas.
Ashton whispered, "Be quiet!"
"Goodbye," said Jules.

Punctuation
Make sure your speech is correctly punctuated!
"There are times, I feel, that you are a little cold," I said.

Different Names
Inverted Commas are also called:
Speech Marks
Quotation Marks


visit [twinkl.com](https://www.twinkl.com)

Bess, my beloved, said the Highwayman.

"Sssshhh," said Bess, "I think someone might be here," The rustling in the stable yard continued, and the Highwayman got his rapier out ready. Who goes there? said the Highwayman quietly. But there was no answer. All of a sudden, there was a wail in pain, "Owww!" In front of Bess and the Highwayman stood Tim the ostler. What are you doing here said Bess.

"I'm sorting out the horses! Bess you cannot be with this awful being, he is not the man for you! said Tim. After hearing this, the Highwayman, held the point of the rapier under Tim's chin, "Excuse me, what did you say I tell you boy, if you say anything against me, I will use this weapon to hurt you.

Verbs to replace 'said' wordbank

whispered

exclaimed

hissed

asked

questioned

Take a brain break and do some Harry Potter Yoga!

<https://www.bing.com/videos/search?q=cosmic+yoga+harry+potter&docid=608014623722180292&mid=C697946E2C832CB6FAD3C697946E2C832CB6FAD3&view=detail&FORM=VIRE>

Task 3 - TT Rockstars - Can you beat Mrs Taylor on the Rock Slam?

Task 4 - Maths - dividing a 3 digit number by a 1 digit number
<https://vimeo.com/492054040>



Divide 3-digits by 1-digit

- 1 Jack is working out $844 \div 4$ using a place value chart.

H	T	O
800	40	4
800	40	4
800	40	4
800	40	4

- a) Talk about Jack's method with a partner.
b) Complete the division.

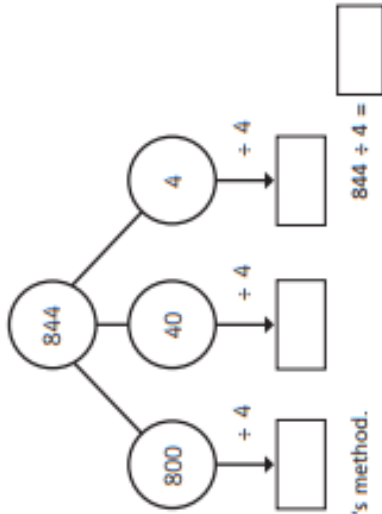
$$844 \div 4 = \square$$

- 2 Use Jack's method to work out these divisions.

a) $525 \div 5 = \square$ c) $840 \div 8 = \square$

b) $636 \div 6 = \square$ d) $903 \div 3 = \square$

- 3 Eva is working out $844 \div 4$ using a part-whole model.

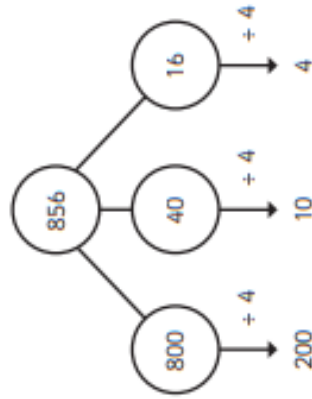


Complete Eva's method.

- 4 A ball of string is 848 cm long. It is cut into 4 equal pieces.

What is the length of one piece of string?

- 5 Whitney is using flexible partitioning to divide a 3-digit number.

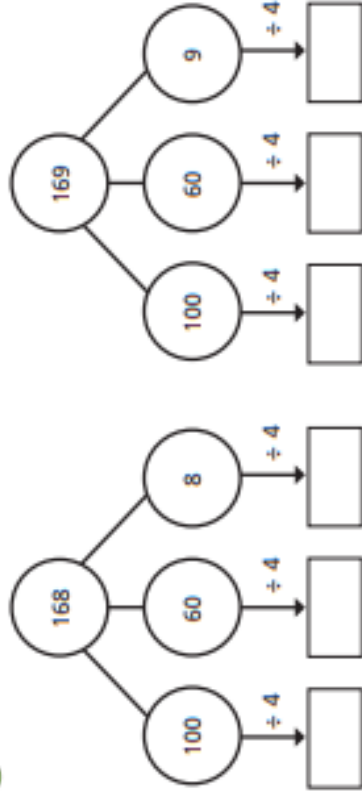


Could Whitney have partitioned her number another way?

Use Whitney's method to work out these divisions.

- a) $585 \div 5 =$ c) $648 \div 4 =$
 b) $672 \div 6 =$ d) $847 \div 7 =$

6 Complete the part-whole models and divisions.



$168 \div 4 =$

$169 \div 4 =$

What is the same and what is different about the calculations?
 Talk about it with a partner.

7 Complete the divisions.

- a) $258 \div 6 =$ c) $864 \div 4 =$
 b) $623 \div 5 =$ d) $824 \div 3 =$

8

Eva has a piece of ribbon.

The ribbon measures 839 cm long.

How much ribbon would be left over if she cuts it into:

a) 4 equal pieces

b) 6 equal pieces

c) 8 equal pieces

Can Eva cut the ribbon into equal pieces

with no ribbon left over?

Explain your answer.

9

Use 15 counters and a place value chart.

a) Can you make a number that is divisible by 3?

b) Can you make a number that has a remainder

of 1 when divided by 3?

c) Can you make a number that has a remainder

of 2 when divided by 3?

What do you notice? Talk about your findings with a partner.

Lunchtime!



1:15pm - Class Zoom


Task 5 - RE - The Easter Story

Challenge 1 - Create a storyboard of the Easter story.
(It is on Purple Mash)

Challenge 2 - Forgiveness

Watch this clip -

<https://www.bbc.co.uk/teach/school-radio/assemblies-ks1-ks2-forgiveness-story-of-easter-jesus/z62w96f>



Note down the different reasons why Judas betrayed Jesus. How did Judas feel?

See you soon Year 5!!

I can't wait to see all your brilliant work... Mrs Taylor