

Friday Task 1.

	T	O
	6	1
x		5
<hr/>		
3	0	5

3

	T	O
	7	4
x		7
<hr/>		
5	1	8

2

	T	O
	2	6
x		4
<hr/>		
1	0	4




2

Dexter has the correct answer.

Alex has forgotten to add the two hundreds she exchanged from the tens column.




**Flashback 4** Year 4 | Week 1 | Day 1

- 1) What is  $10 \times 7$ ? **70**
- 2) Work out  $90 \div 10$  **9**
- 3) What is seven multiplied by one? **7**
- 4) Find the perimeter of the rectangle. **30 cm**



**Flashback 4** Year 4 | Week 1 | Day 2

- 1) Work out  $11 \times 7$  **77**
- 2) What is  $63 \div 7$ ? **9**
- 3) What is nine multiplied by zero? **0**
- 4) Find the perimeter of the square. **16 cm**

**Flashback 4** Year 4 | Week 1 | Day 3

- 1) What is  $3 \times 12$ ? **36**
- 2) Find  $36 \div 6$  **6**
- 3) Six divided by six is equal to? **1**
- 4) Find the sum of 3,482 and 1,563 **5,045**

**Flashback 4** Year 4 | Week 1 | Day 4

- 1) Work out  $3 \times 3 \times 4$  **36**
- 2) What is nine multiplied by eight? **72**
- 3)  $12 \div 1$  is equal to? **12**
- 4) Work out  $3,924 - 1,451$  **2,473**

