

Friday Task 1 answers.



Eva's method is more reliable than Teddy's because her squares cover the whole surface of the rectangle whereas the circles leave some of the surface uncovered.

There were 20 squares. You know this because two sides of the rectangle are shown.



Friday Task 2 answers.



Flashback 4 Year 4 | Week 4 | Day 1

- Calculate 5×12 **60**
- Divide 69 by 3 **23**
- Find the product of 3, 4 and 5 **60**
- A laptop costs £4,000
A record player costs £472 less than a laptop.
How much does a record player cost? **£3,528**

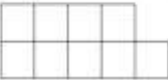





Flashback 4 Year 4 | Week 4 | Day 2

- Which shape has the largest area?
 **A**  **B**
- Divide 75 by 3 **25**
- What are the factors of 14? **1, 2, 7, 14**
- Write 27 in Roman Numerals. **XXVII**





Flashback 4 Year 4 | Week 4 | Day 3

- What is the area of the shape?
Give your answer in squares.
 **9 squares**
- Calculate $87 \div 5$ **$17 \text{ r } 2$**
- Multiply 26 by 4 **104**
- Round 3,456 to the nearest 100 **3,500**

Flashback 4 Year 4 | Week 4 | Day 4

- Find the area of the rectangle.
 **12 squares**
- Calculate $372 \div 3$ **124**
- What is 37×5 ? **185**
- What is the sum of 1,386 and 299? **1,685**

